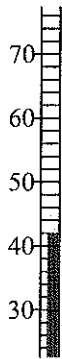


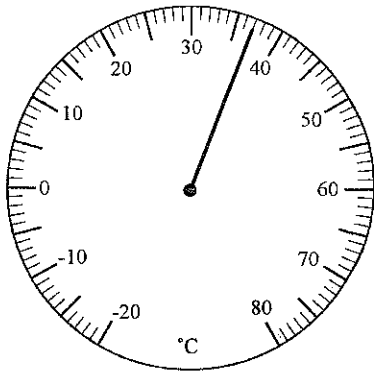
Practice Packet #3 (Due Tuesday 10-28-14)

1. $(32)(87)$
2. Adrianna spent \$5.46 at the stationery store. If she bought 6 erasers, how much, in cents, did each eraser cost?
3. There were 77 runners entered in a race. On the day of the race, 57 more runners entered. How many runners were entered in the race?
4. $(93)(78)$
5. Name the temperature, in degrees Fahrenheit, shown on the thermometer.




6. At Harpo's Pizza a small pizza costs \$5.25. Phil gave the cashier \$10.00 for a small pizza. How much change should he receive?
7. $(463)(65)$
8. The post office sold 39-cent commemorative stamps in sheets of 25 stamps. What was the price for one sheet of stamps?
9. Jason paused on step 189 on his way to the top of the Statue of Liberty. If there were 354 steps in all, how many more steps did Jason have to climb?

10. What temperature does the thermometer show?



11. What temperature is shown on this thermometer in degrees Fahrenheit?



12. Tom has read 96 pages of a 312-page book. How many pages does Tom need to read to finish the book?

13. $(48)(67)$

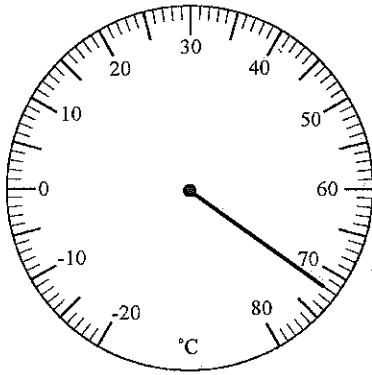
14. Mangledorn's Notions packs 339 beads in each box. Petula ordered 65 boxes of beads. How many beads did Petula order?

15. If 1000 pennies are put into rolls of 50 pennies, how many rolls will be made?

Name: _____

ID: A

16. What temperature does the thermometer show?



17. Jill had \$100 in the bank. She took \$31 out of the bank. How much money, in dollars, does she have left?

18. $(126)(46)$

19. Vernon eats about 666 calories of food at each meal. How many calories will he eat in 5 meals?

20. What temperature does the thermometer show, in degrees Celsius?

